

Maths Revision Booklets

(Week 10, Term 3)

PREP Pa-c

Contents Links:

[Level 1](#)

[Level 2](#)

[Level 3](#)

Note: Pick and choose through the levels depending on your children. They might do level 1 with one topic and level three with another.


Maths Revision Booklet, Year Pa

Name:


Date:

Ordinal Numbers


Colour the **1st** Starfish



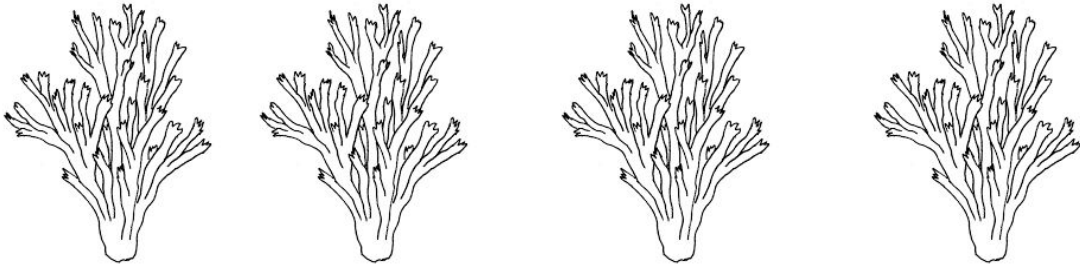
Colour the **3rd** Shell




Colour the **4th** Dolphin



Colour the **last** coral



Colour the **2nd** Fish



Number Formation Practise

1	2	3	4	5
6	7	8	9	10
11	12	13	14	15
16	17	18	19	20

Write the numbers to 20

CfXYf]b['h\Y' 8Umg'cZ'h\Y'K YY_!' 'K f]hY'h\Y'XUmg'cZ'h\Y'k YY_]bÆ
cfXYfÆ

A cbXUnžHi YgXUnžK YXbYgXUnžH\i fgXUnž: f]XUnžGUhi fXUnžGi bXUnžÆ

--	--	--

--	--	--

--

Ordering Numbers

Write the numbers in order from smallest to largest (parents/teachers to assist).

2 7 6 5 4 3

— — — — — —

11 10 8 7 9











12

— — — — — —

20 21 19 17 22 18



— — — — — —

Repeated Addition

 and  is
 and  is
 and  is
 and  is
 and
 is

Making Simple Graphs

Instruments in the Band

Flute					
Guitar					
Drum					
Violin					

How many people play the flute? _____

How many people play the violin? _____

What is the most popular instrument? _____

How many people are in the band altogether? _____


Maths Revision Booklet, Year Pb

Name:

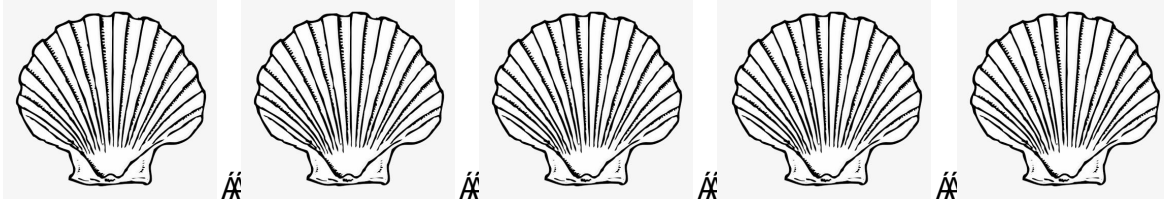
Date:

Ordinal Numbers


Colour the **third** starfish



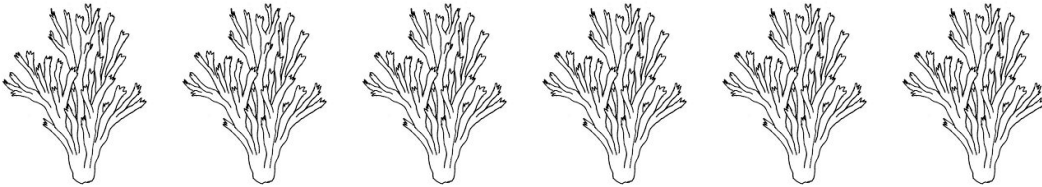
Colour the **4th** shell




Colour the **fifth** dolphin



Colour the **6th** coral



Colour the **seventh** fish



Number Formation Practise

1	2	3	4	5
6	7	8	9	10
11	12	13	14	15
16	17	18	19	20
21	22	23	24	25
26	27	28	29	30
31	32	33	34	35
36	37	38	39	40
41	42	43	44	45
46	47	48	49	50

K f]hY' h\Y' XUmġ' cZ' h\Y' kYY_ ']b' cfXYfÆ

Hi YgXUmž' GUhi fXUmž' H\i fgXUmž' Gi bXUmž' A cbXUmž' K YXbYgXUmž' : f]XUmÆ

--	--	--

--	--	--

--

Ordering Numbers

Write the numbers in order from smallest to largest

2 7 6 5 4 3 9 8

— — — — — — — —















22 21 19 20 18 17 24 23

— — — — — — — —

32 30 31 29 28 33 34 27



— — — — — — — —

Repeated Addition

 and  is
 and  is
 and  is
 and  is
 and  is
 and  is
 and  is

Making Simple Graphs

Instruments in the Band

Flute					
Guitar					
Drum					
Violin					
Trumpet					

How many people play the flute? _____

How many people play the violin? _____

What is the most popular instrument? _____

How many people play the trumpet? _____

How many people are in the band altogether? _____

Maths Revision Booklet, Year Pc

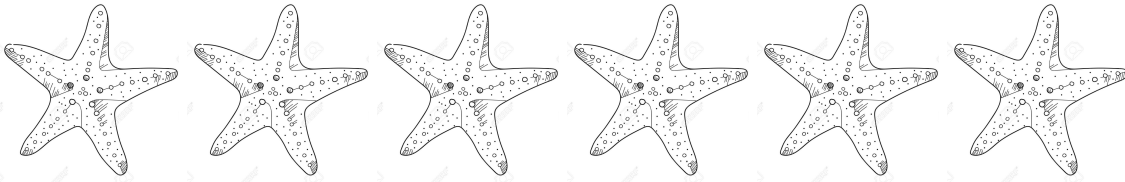
Name:

Date:

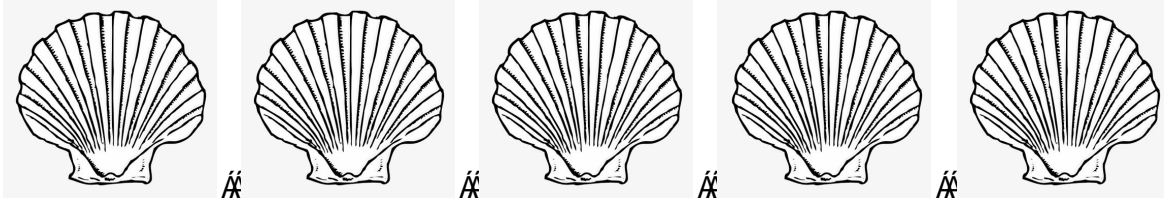
Á

Ordinal Numbers

Colour the **fifth** starfish



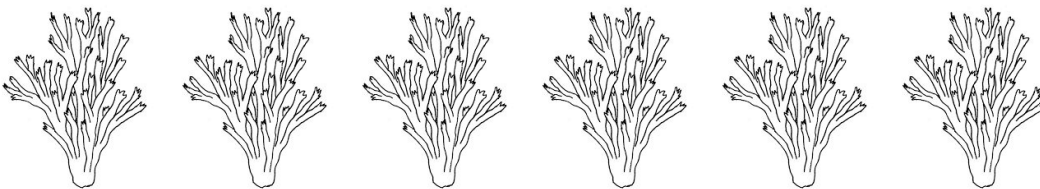
Colour the **fourth** shell




Colour the **fifth** dolphin




Colour the **6th** coral



Colour the **7th** fish



Colour the **eleventh** palm



Create your own

Number Formation Practise - Continue to 100

1	2	3	4	5
6	7	8	9	10
11	12	13	14	15
16	17	18	19	20
21	22	23	24	25
26	27	28	29	30

Write the days of the week in order

Æ

--	--	--

--	--	--

--

Ordering Numbers

Write the numbers in order from LARGEST to SMALLEST

2 7 6 5 4 3 9 8

— — — — — — — —














22 21 19 20 18 17 24 23

— — — — — — — —

32 30 31 29 28 33 34 27

— — — — — — — —

Repeated Addition

 and  is
 and  is
 and  is
 and  is
 and  is
 and  is
 and  is



and



is






and



is

Making Simple Graphs

Instruments in the Band

Flute					
Guitar					
Drum					
Violin					
Trumpet					

How many people play the flute? _____

How many people play the violin? _____

What is the most popular instrument? _____

How many people play the trumpet? _____

How many people are in the band altogether? _____

Á

Sharing, modifying or redistributing this material is prohibited.

This material falls under the Copyright Act, 1968.

© Copyright, Commonwealth of Australia Á